


CANDIDATE
NAME

CENTRE
NUMBER

--	--	--	--	--

CANDIDATE
NUMBER

--	--	--	--



CAMBRIDGE INTERNATIONAL MATHEMATICS

0607/21

Paper 2 (Extended)

October/November 2018

45 minutes

Candidates answer on the Question Paper.

Additional Materials: Geometrical Instruments

READ THESE INSTRUCTIONS FIRST

Write your Centre number, candidate number and name on all the work you hand in.

Write in dark blue or black pen.

Do not use staples, paper clips, glue or correction fluid.

You may use an HB pencil for any diagrams or graphs.

DO NOT WRITE IN ANY BARCODES.

Answer **all** the questions.

CALCULATORS MUST NOT BE USED IN THIS PAPER.

All answers should be given in their simplest form.

You must show all the relevant working to gain full marks and you will be given marks for correct methods even if your answer is incorrect.

The number of marks is given in brackets [] at the end of each question or part question.

The total number of marks for this paper is 40.

This document consists of **7** printed pages and **1** blank page.

Formula List

For the equation $ax^2 + bx + c = 0$ $x = \frac{-b \pm \sqrt{b^2 - 4ac}}{2a}$

Curved surface area, A , of cylinder of radius r , height h . $A = 2\pi rh$

Curved surface area, A , of cone of radius r , sloping edge l . $A = \pi rl$

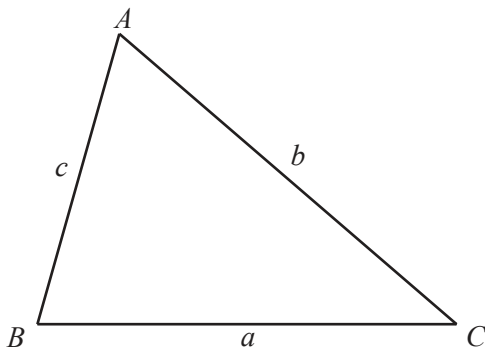
Curved surface area, A , of sphere of radius r . $A = 4\pi r^2$

Volume, V , of pyramid, base area A , height h . $V = \frac{1}{3}Ah$

Volume, V , of cylinder of radius r , height h . $V = \pi r^2 h$

Volume, V , of cone of radius r , height h . $V = \frac{1}{3}\pi r^2 h$

Volume, V , of sphere of radius r . $V = \frac{4}{3}\pi r^3$



$$\frac{a}{\sin A} = \frac{b}{\sin B} = \frac{c}{\sin C}$$

$$a^2 = b^2 + c^2 - 2bc \cos A$$

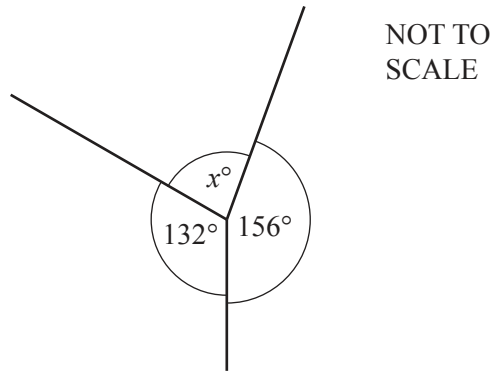
$$\text{Area} = \frac{1}{2}bc \sin A$$

Answer **all** the questions.

- 1 Work out.
 -7×-5

..... [1]

2



Find the value of x .

$x =$ [1]

- 3 A bag contains 8 blue balls, 3 red balls and 4 green balls only.
 One ball is chosen at random.

Find the probability that this ball is red.
 Give your answer as a fraction in its simplest form.

..... [2]

- 4 Write 3^{-2} as a fraction.

..... [1]

- 5 Solve.
 $6x - 5 = 19$

$x =$ [2]

- 6 Find the lowest common multiple (LCM) of 12 and 15.

..... [2]

- 7 Find the size of one exterior angle of a regular octagon.

..... [2]

- 8 The point A has co-ordinates $(1, 9)$. The point B has co-ordinates $(4, 5)$.

Find the length of AB .

..... [2]

- 9 Simplify.

$$(5x^4y^3)^2$$

..... [2]

- 10 List the integer values of x for which $-4 \leq 2x < 6$.

..... [2]

- 11 Simplify.

$$\sqrt{32} - \sqrt{72} + \sqrt{50}$$

..... [2]

- 12 Find the next term and an expression for the n th term of the following sequence.

$$-9, \quad -3, \quad 7, \quad 21, \quad 39, \quad \dots$$

next term =

n th term = [3]

- 13 The bearing of point B from point A is 234° .

Work out the bearing of point A from point B .

..... [2]

14 Solve the simultaneous equations.

$$3x + 2y = 4$$

$$2x - 3y = 7$$

$$x = \dots\dots\dots$$

$$y = \dots\dots\dots [4]$$

15 Factorise.

$$4x^2 - 7x - 2$$

$$\dots\dots\dots [2]$$

16 A bag contains 4 red balls and 5 blue balls only.
Two balls are chosen at random without replacement.

Find the probability that the two balls chosen are different colours.

$$\dots\dots\dots [3]$$

- 17 Rationalise the denominator, giving your answer in its simplest form.

$$\frac{5 + \sqrt{3}}{5 - \sqrt{3}}$$

..... [3]

- 18 The surface area of a sphere with radius r is equal to the curved surface area of a cone with radius r and height h .

Show that $h = r\sqrt{k}$, where k is a constant.

[4]

BLANK PAGE

Permission to reproduce items where third-party owned material protected by copyright is included has been sought and cleared where possible. Every reasonable effort has been made by the publisher (UCLES) to trace copyright holders, but if any items requiring clearance have unwittingly been included, the publisher will be pleased to make amends at the earliest possible opportunity.

To avoid the issue of disclosure of answer-related information to candidates, all copyright acknowledgements are reproduced online in the Cambridge International Examinations Copyright Acknowledgements Booklet. This is produced for each series of examinations and is freely available to download at www.cie.org.uk after the live examination series.

Cambridge International Examinations is part of the Cambridge Assessment Group. Cambridge Assessment is the brand name of University of Cambridge Local Examinations Syndicate (UCLES), which is itself a department of the University of Cambridge.